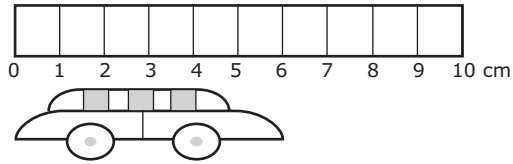


1 How long is the toy car?



\_\_\_\_\_ cm

2 Write the answer in each blank.

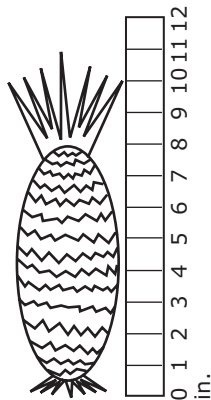
Of these numbers

823    799    576    608

\_\_\_\_\_ is the smallest

\_\_\_\_\_ is the largest

3 What is the height of the pineapple?



\_\_\_\_\_ in.

4 Rich has 3 pencils. Hank has 4 pencils. How many pencils do Rich and Hank have in all?

\_\_\_\_\_

5 Write the answer in the blank.

$$9 + 8 + 18 = \underline{\hspace{2cm}}$$

6 Use the graph to answer the question.

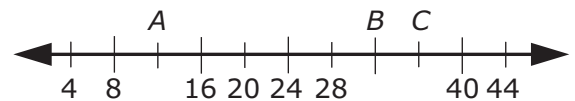


How many employees work on Tuesday? \_\_\_\_\_

7 Write + or - in the blank.

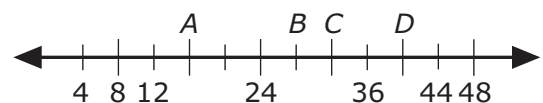
$$31 \underline{\hspace{1cm}} 6 = 25$$

8



What number does C stand for?

\_\_\_\_\_



What number does D stand for?

\_\_\_\_\_

**9** Counting by 3s, fill in the blanks.

18, 21, 24, \_\_\_\_\_ , \_\_\_\_\_

**10** There are 15 books on a shelf. Michael has read 9 of them. How many books has he not read?

\_\_\_\_\_

**11** How much money is pictured below?



\_\_\_\_\_ ¢

**12** Write the answer in each blank.

Of these numbers

342    324    391    375

342 is smaller than \_\_\_\_\_ and \_\_\_\_\_

**13** Write the time.



\_\_\_\_\_ : \_\_\_\_\_

**14** Starting with the number 0 and counting left to right,

0	2	4	6	8	10	12
14	16	18	20	22	24	26
28	30	32	34	36	38	40

write the first number \_\_\_\_\_

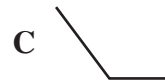
write the sixth number \_\_\_\_\_

write the fifth number \_\_\_\_\_

**15** Write + or - in the blank.

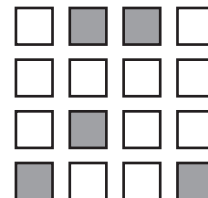
13 \_\_\_\_\_ 9 = 22

**16** Which shape below is a right angle?



\_\_\_\_\_

**17** What fraction of the boxes is shaded?  
Write the fraction in the blank.




\_\_\_\_\_

- 18** Fill in the blanks.

749 = \_\_\_\_ hundreds \_\_\_\_ tens \_\_\_\_ ones

- 19** How much money is pictured below?



\$ \_\_\_\_\_

- 20** Write “less” or “greater” in the blank.

315 is \_\_\_\_\_ than 297

- 21** Starting with the letter A and counting left to right,

A	B	C	D	E	F	G
H	I	J	K	L	M	N
O	P	Q	R	S	T	U

write the second letter \_\_\_\_\_

write the fourth letter \_\_\_\_\_

write the seventh letter \_\_\_\_\_

- 22** Fill in the blanks.

188 = \_\_\_\_ hundreds \_\_\_\_ tens \_\_\_\_ ones

- 23** Luke won 8 games of checkers. Keith won 5 games of checkers. How many more games of checkers did Luke win than Keith?

\_\_\_\_\_


- 24** Write the answer in the blank.

\_\_\_\_\_ = Three hundreds two tens six ones

- 25** Beth has 21 pretzels and Amy has 31 pretzels. How many more pretzels does Amy have than Beth?

\_\_\_\_\_

- 26** Write the time.



\_\_\_\_\_ : \_\_\_\_\_

- 27** A pack of 12 trading cards is going to be shared equally among 4 friends. How many cards will each friend get?

\_\_\_\_\_

- 28** What fraction of the stars is shaded?  
Write the fraction in the blank.



- 29** Write the answer in the blank.

What number is 320 more than 210?

\_\_\_\_\_

*Reminder:* There is **no** partial credit when scoring. The answer must be correct **in its entirety** to obtain the correct score value. If any part of a multi-part question is incorrect, the score is zero.

### Grade 2, Probe 11 Answer Key

Item No.	Answer	Correct	Incorrect
1.	6	1	0
2.	576, 823	1	0
3.	11	1	0
4.	7	1	0
5.	35	1	0
6.	8	1	0
7.	–	1	0
8.	36, 40	2	0
9.	27, 30	1	0
10.	6	1	0
11.	45	1	0
12.	391, 375	1	0
13.	11, 00	1	0
14.	0, 10, 8	2	0
15.	+	1	0
16.	A	3	0
17.	$\frac{5}{16}$	2	0
18.	7, 4, 9	2	0
19.	1.55	2	0
20.	greater	1	0
21.	B, D, G	2	0
22.	1, 8, 8	1	0
23.	3	2	0
24.	326	1	0
25.	10	2	0
26.	12, 15	2	0
27.	3	3	0
28.	$\frac{10}{12}$ or $\frac{5}{6}$	2	0
29.	530	3	0

Total